

Answers and Dictation Material

Part 1: Intervals, Scales and Melody

Question 1: Music Theory – Intervals



Per 5th
above

Maj 7th
above

Per 4th
below

min 7th
above



Per 8ve
above

dim 7th
above

dim 5th
below

Maj 3rd
above

Question 2: Music Theory – Scales and Modes

Harmonic minor
descending

Major
ascending

melodic minor
descending



OR



SOLO PERFORMANCE UNIT 1 PRACTICE EXAMINATION

Theory and Aural Comprehension

Total Marks: /53

Part 1: Intervals, Scales and Melody

Question 1: Music Theory – Intervals

(2 minutes working time)

Write the intervals indicated (above or below the given note).




Per 5th
above

Maj 7th
above

Per 4th
below

min 7th
above



Per 8ve
above

dim 7th
above

dim 5th
below

Maj 3rd
above

8 marks

Question 2: Music Theory – Scales and Modes

(3 minutes working time)


Starting on the tonic notes given, write the scale forms, as specified.

Use only one system of notation i.e. either treble **or** bass clef.


Harmonic minor
descending

Major
ascending

melodic minor
descending



OR



9 marks

Question 3: Aural Comprehension – Melodic Transcription



Question 3: Aural Comprehension – Melodic Transcription

A two part score of four bars length is given below. Three bars of the top part are not notated.

The excerpt will be played **five** times.

- Note:
- The time signature, key signature, total number of bars and the pitch (but not the duration) of the first note of the part to be transcribed are given.
 - You must transcribe both the rhythm and the pitches of the missing bars.

On the blank staff, fully **transcribe** the **top** part.

The musical score consists of two staves. The top staff is in treble clef, and the bottom staff is in bass clef. Both are in 6/8 time and B-flat major. The top part has four bars: the first bar contains a quarter note G4, a quarter note A4, a quarter note Bb4, and a quarter note C5; the next three bars are blank. The bottom part has four bars: the first bar contains a half note Bb3; the second bar contains a quarter note G3, a quarter note A3, and a quarter note Bb3; the third bar contains a quarter note C4, a quarter note Bb3, and a quarter note A3; the fourth bar contains a quarter note G3, a quarter note F3, and a quarter note E3.

15 marks